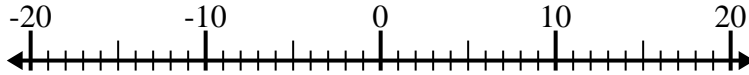




Solve each problem. Use the numberline if needed.

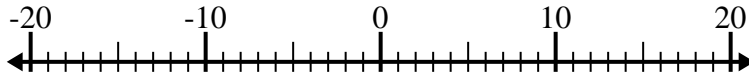
Answers

1) $(-3) - 9 =$ _____



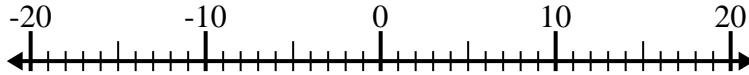
1. _____

2) $(-11) + (-7) =$ _____



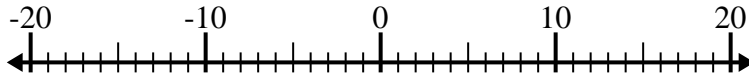
2. _____

3) $(-15) + 11 =$ _____



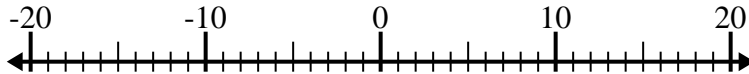
3. _____

4) $10 - (-4) =$ _____



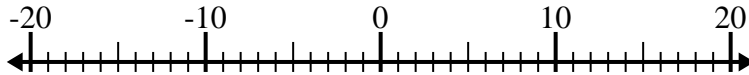
4. _____

5) $(-2) + (-5) =$ _____



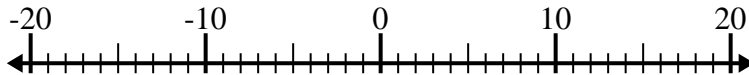
5. _____

6) $(-14) - (-7) =$ _____



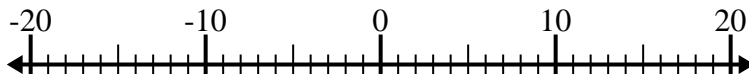
6. _____

7) $(-10) - 1 =$ _____



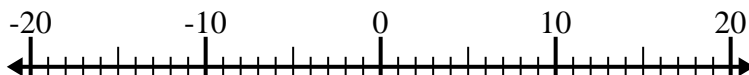
7. _____

8) $10 - (-6) =$ _____



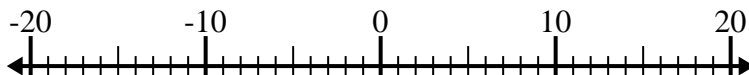
8. _____

9) $13 + (-1) =$ _____



9. _____

10) $(-8) + 4 =$ _____

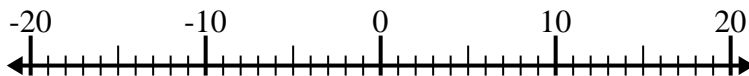


10. _____

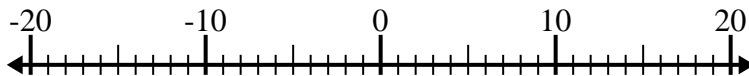


Solve each problem. Use the numberline if needed.

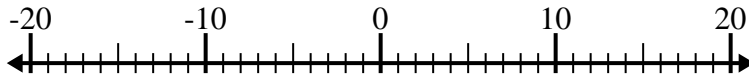
1) $(-3) - 9 = \underline{-12}$



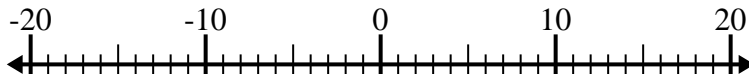
2) $(-11) + (-7) = \underline{-18}$



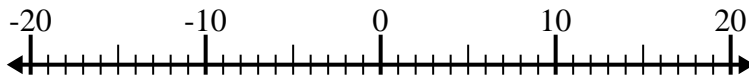
3) $(-15) + 11 = \underline{-4}$



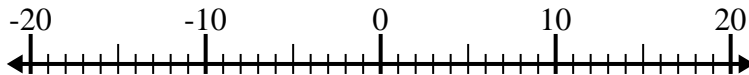
4) $10 - (-4) = \underline{14}$



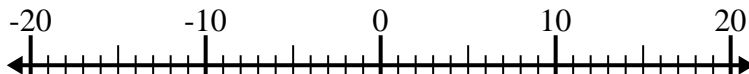
5) $(-2) + (-5) = \underline{-7}$



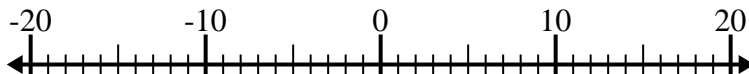
6) $(-14) - (-7) = \underline{-7}$



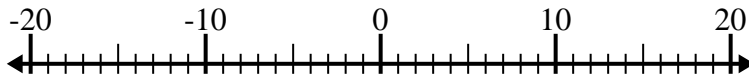
7) $(-10) - 1 = \underline{-11}$



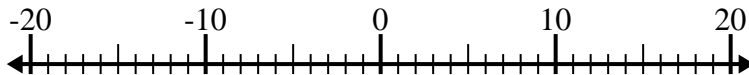
8) $10 - (-6) = \underline{16}$



9) $13 + (-1) = \underline{12}$



10) $(-8) + 4 = \underline{-4}$



Answers

1. **-12**

2. **-18**

3. **-4**

4. **14**

5. **-7**

6. **-7**

7. **-11**

8. **16**

9. **12**

10. **-4**